



St. XAVIER'S HIGH SCHOOL

**EDUCATION FOR ALL
BANKURA, WEST BENGAL**

Affiliated to CBSE (New Delhi) 10+2 Level

Affiliation No.: 2430130

School Code: 15720

WEEKLY TEST-I

CLASS: II

SUBJECT: ENGLISH.

FULL MARKS - 10

A) Rearrange the jumbled words to make sentences. .

(1×5=5)

- 1) boy he is a good
- 2) is playing he football
- 3) good friends are they
- 4) is car this a
- 5) are many books there

B) Fill in the blanks with a or an.

(1×5=5)

- 1) ---- beautiful flower
- 2) ---- onion
- 3) ---- cup
- 4) ----- bottle.
- 5) ----- apple

WEEKLY TEST-II

SUBJECT: ENGLISH

FM: 10

A) Write the opposites of the following words.

(1×5=5)

- 1) Open 2) Soft 3) New 4) Large 5) Ugly

B) Fill in the blanks with am, is, or are.

(1×5=5)

- 1) He ---- playing football.
- 2) We ----- good friends.
- 3) It ----- a ball.
- 4) You ----- a student.
- 5) I ---- reading a story book.

WEEKLY TEST-III

SUBJECT: ENGLISH

FM: 10

A) Write the meanings of the following words.

(1×5=5)

- 1) Ugly 2) Large 3) Rescue 4) Victory 5) Ancient

B) Fill in the blanks with has or have.

(1×5=5)

- 1) He ---- a box.
2) We ----- many toys.
3) It ----- a long tail.
4) You ----- many books.
5) I ---- a pencil.

WEEKLY TEST-IV

SUBJECT: ENGLISH

FM: 10

A) Write the rhyming words of the following.

(1×5=5)

- 1) Mouse 2) Side 3) Sound 4) Run 5) Sit

B) Write the past tense of the following words.

(1×5=5)

- 1) See
2) Go
3) Do
4) Play
5) Sing

WEEKLY TEST-I

SUBJECT: MATHEMATICS

FM – 10

A. Answer the following:

(1 × 6= 6)

1. 34 is odd or even number
2. Compare: 123 ____ 172
3. Expand: 165
4. Write the number name of 40
5. Cylinder has ____ edges
6. Cuboid has _____ faces.

B. Solve:

(2 × 2= 4)

1. $124 + 24$
2. $200 - 44$

WEEKLY TEST-II

SUBJECT: MATHEMATICS

FULL MARKS -10

A. Answer the following:

(1 × 4= 4)

1. Expand: 695
2. Write the number name of 878
3. What is the standard units of weight?
4. Aditya drinks 200ml milk every day. How much milk will he have in 2 days?

B. Solve:

(2 × 3= 6)

1. $464 + 243$
2. $6431 - 2751$
3. There are 6 chocolates in a box. How many chocolates will be there in 7 such boxes?

WEEKLY TEST-III

SUBJECT: MATHEMATICS

FM - 10

A. Answer the following:

(1 × 6= 6)

1. Standard unit of length is -
2. _____ 20- rupee notes make Rs 200
3. 3: 30 can be expressed as-
4. Re 1 = ___p
5. Frist day of the week-
6. In a leap year February has _____ days.

B. Solve:

(2 × 2= 4)

1. Draw 5: 15 and write the time
2. Usha has Rs 90. She lost Rs 25. How much money does she have with her now?

WEEKLY TEST-IV

SUBJECT: MATHEMATICS

FM - 10

A. Answer the following:

(1 × 6= 6)
















1. Complete the series:
 - a) 9, 18, 27, _____, _____
 - b) 5, 10, 15, _____, _____.
2. Divide :
 - A) $24 \div 1 =$
 - B) $30 \div 10 =$
 - C) $0 \div 7 =$
 - D) $10 \div 10 =$

B. Solve:

(4)

Richard, a farmer, owns some farms animals. Picture graph shows the number of animals he has in his farm. Use the picture graph to answer the questions.

Richard's Farm Animals

				
				
				
				
				
Goat	Cow	Chicken	Horse	Pig

1. Which animal is fewest?
2. How many goats are there?
3. Are there more chickens or cows?
4. How many animals are there in the farm?

WEEKLY TEST-I

SUBJECT: BENGALI

FM - 10

- ১) এক কথায় উত্তর দাও : (3×1)
 ১. নবীনের বয়স কত ?
 ২. নবীন রাখালকে কী বলিয়াছিল ?
 ৩. কাহারো চিরকাল দুঃখ পাইবে ?
- ২) বিপরীত শব্দ লেখ : (2×1)
 - ক) প্রবীণ খ) অযত্ন
- ৩) দুই অক্ষরের দুটি করে মিশ্র শব্দ লেখ : (5×1)
 - ক) ক্ খ) ক্ষ গ) ক্ত ঘ) ঠ ঙ) ত্ত

WEEKLY TEST-II

SUBJECT: BENGALI

FM - 10

- ১) সঠিক উত্তরের নিচে দাগ দাও: (5×1)
 - ১.১ আদ্যনাথ বাবুর বাড়ি- ক) অহল্‌য়াপাড়া খ) শল্যপুৰ গ) বৈদ্যপুৰ ।
 - ১.২ কলেজে পড়ে - ক) রম্যনাথ খ) সৌম্যনাথ গ) ধৌম্যনাথ ।
 - ১.৩ কুমোর পাড়ার - ক) ঘোড়ার গাড়ি খ) গোরুর গাড়ি গ) উটের গাড়ি ।
 - ১.৪ হাট বসেছে - ক) শুক্রবারে খ) সোমবারে গ) শনিবারে ।
 - ১.৫ আদ্যনাথ বাবুর ভৃত্যের নাম - ক) সত্য খ) ভজহরি গ) রায়চরন ।
- ২) এক কথায় উত্তর দাও : (5×1)
 ১. কোথায় হাট বসেছে ?
 ২. আদ্যনাথ কেমন লোক?

৩. খড়ের আঁটি কে নৌকা বেয়ে নিয়ে আসে ?
৪. কারা খুশি হয়ে নৃত্য করছে?
৫. কোথায় মাছি ওড়ে ?

WEEKLY TEST-III

SUBJECT: BENGALI

FM - 10

১) এক কথায় উত্তর দাও :

(4×1)

- ক) কবে উদ্ভব মন্ডলের কন্যার বিবাহ ?
খ) কার একটি লেজ কাটা ভক্ত কুকুর আছে ?
গ) উদ্ভবের কত টাকা দন্ড স্থির হয়েছিল ?
ঘ) কোন মাসে হাট বসে ?

২) এলোমেলো বর্ণ সাজিয়ে শব্দ তৈরি করো :

(2×1)

- ক) পা র্ণ ত ক খ) দা মি র জ

৩) বাক্য রচনা করো :

(4×1)

- ক) অপমান খ) বিশ্বাস গ) ভক্ত ঘ) গুনগুন

WEEKLY TEST-IV

SUBJECT: BENGALI

FM - 10

১) এক কথায় উত্তর দাও :

(4×1)

- ক. চুরি করা কাহাকে বলে ?
খ. যে চুরি করে লোকে তাহাকে কি বলে ?
গ. ভুবনের ফাঁসির জন্য কে দায়ী ?
ঘ. কাহাকে লোকে বিশ্বাস করে না ?

২) নিচের শব্দগুলির মানে লেখ :

(3×1)

- ক) বিলক্ষণ খ) পুস্তক গ) আঞ্জা

৩) নিচের শব্দগুলির বিপরীত শব্দ লেখ :

(3×1)

- ক) বিশ্বাস খ) তিরস্কার গ) নিকট

WEEKLY TEST-I

SUBJECT: HINDI

FM - 10

क सही शब्द चुनकर वाक्य पूरे करो।

(5×1=5)

- 1) पेड़ों पर बड़े-बड़े _____ लटक रहे थे। (अंगूर / आम)
2) _____ ने आम तोड़े। (सैनिकों / नौकरों)
3) आपका थाल _____ पड़ा है। (भरी/ खाली)
4) यह सुनते ही सब _____ लगे। (हँसने / रोने)
5) नौकरों ने आम _____ सजाए। (थाल में/ प्याली में)

ख) दिए गए शब्दों के अर्थ लिखें।

(5x1=5)

- 1) आसन 2) भूल 3) जंगल 4) पर्व 5) उपयोग

WEEKLY TEST-II

SUBJECT: HINDI

FM - 10

क दिए गए प्रश्नों के उत्तर लिखें।

(5x1=5)

- 1) सैर कौन कर रहे थे ?
- 2) सूरज ने बादलों से क्या कहा ?
- 3) बंदर घूमते- घूमते कहाँ पहुँच गए ?
- 4) हवाईजहाज़ का रंग कैसा था ?
- 5) माँ थाली में क्या भरकर लाई ?

ख दिए गए शब्दों के अर्थ लिखें। (

(5x1=5)

- 1) ज़मीन 2) नज़र 3) दिवस 4) नन्हा 5) हठ

WEEKLY TEST-III

SUBJECT: HINDI

FM - 10

क कविता की पंक्तियाँ पूरी करो। (

5

अमावस की , _____

जगमग । _____

दीप , _____

_____ हाथ लगाओ।

हम सबको , _____

प्यार बढ़ाते । _____

_____ देते हैं,

पास। _____ पास -

ख प्रश्नों के उत्तर लिखें। (

(5x1=5)

- 1) टर्- टर् कौन करने लगा ?
- 2) बालिका कहाँ घूम रही थी ?
- 3) संयम नए स्कूल में किसलिए गया था ?
- 4) संयम के सहपाठियों के क्या नाम थे ?
- 5) दीवाली पर हम क्या जलाते हैं ?

WEEKLY TEST-I

SUBJECT: EVS

FM - 10

A. Fill in the blanks:-

(5x1=5)

1. The process by which plants make their food is called _____.
2. Potato is the _____ part of a plant.
3. The group of animals eat only flesh are called _____.
4. A plant absorbs water and minerals from _____.
5. Bear is an _____ animal.

B. Answer the following:-

(5x1=5)

1. What do you mean by life cycle of a plant?
2. Why do we add spice in our food?
3. From where we can get Tea and Coffee?
4. What are the carnivorous animals? Why they are named so?
5. What are the Aquatic animals? Give two example.

WEEKLY TEST-II

SUBJECT: EVS

FM - 10

A. Write the name for the term:-

(4x1)=4

1. The first meal of the day -
2. The smallest bone of human body -
3. The framework of bones which make a particular structure -
4. The group of foods which helps us for build our bones and muscles-

B. Answer the following:-

(3x2)=6

1. What are protective foods? Give two examples.
2. What are amphibians? Give two examples
3. How shadow is formed?

WEEKLY TEST-III

SUBJECT: EVS

FM - 10

A. Answer the following:-

(10x1)=10

1. How many teeth does an adult have?
2. Paper is obtained from which plant?
3. Which is the hardest mineral?
4. Which type of clothes do we wear in the winter season?
5. What is Habitat?
6. We should always cross the road at the?
7. How glass is made?
8. What is crust?
9. Who are omnivores? Give one example
10. What is the home of Lion and Honeybee?

WEEKLY TEST-IV

SUBJECT: EVS

FM - 10

A. Fill in the blanks:-

(5×1)=5

1. We can bend our body at _____.
2. The intermediate meal between lunch and dinner is _____.
3. The green light of traffic signal tells is to _____.
4. An aquatic animal is _____.
5. _____ is the softest mineral.

B. Answer the following:-

(5×1)=5

1. What is opaque?
2. What are synthetic fibers? Give one example.
3. How earthworms are helpful for us?
4. Write the name of the rock by which Taj Mahal is made up with?
5. Write the use of Quartz?

UNIT TEST-I

SUBJECT: ENGLISH

FM - 20

1) Fill in the blanks: -

(1x5)=5

- a) The bird merely ate ----- .
- b) Shanu is too big to wear her old pink -----.
- c) ----- is in a hurry
- d) Once there lived Papa Lion,Mama Lion and -----
- e) Sentence is a group of -----

2) Write T for true and F for false.-

(1x5)= 5

- A) Limb means a branch. -----
- B) Mum cant't lift Shanu up because she is too big .-----.
- C) The Baby Lion could not even growl -----
- D) A question is a sentence that asks something. -----
- E) India is proper noun -----

2) Answer the following questions.

(2x5=10)

- a) What did the child ask the bird?
- b) Why is Shanu puzzled?
- c) How does the poet describe the caterpillar?
- d) Give two examples of Proper Nouns?
- e) Write the plural form of the following nouns.
 - i) Dress
 - ii) Toy

UNIT TEST-I

SUBJECT: BENGALI

FM - 20

বিভাগ - ক

১) সঠিক উত্তরে টিক চিহ্ন দাও :

৬×১=৬

- ক) মেঘের রং - (হলুদ / ঘন নীল / সবুজ) ।
খ) আদ্যনাথ বাবুর ভৃত্যের নাম - (শল্য / বৈদ্য / সত্য) ।
গ) পাড়ার ছেলেরা যাবে- (ফুটবল খেলতে / জঙ্গল সাফ করতে / ব্যাট বল খেলতে) ।
ঘ) সন্ধ্যা হলে ঘরে দিতে বলা হয়েছে - (ধুনোর / ধুপের গন্ধ / সন্ধ্যা প্রদীপের গন্ধ) ।
ঙ) বরের নাম - (সল্য / বৈদ্যনাথ / রম্য) ।
চ) আজ মঙ্গলবার গল্পে যে পতঙ্গের কথা আছে, সেটি হলো - (মশা / ফড়িং / পঙ্গপাল) ।

২) এককথায় উত্তর দাও :

৪×১=৪

- ক) কার ঘরে ফুলদানি রাখতে বলা হয়েছে ?
খ) জঙ্গল সাফ করার জন্য সঙ্গে কী কী নিতে হবে ?
গ) কোন বারে হাট বসেছে ?
ঘ) কার কন্যার বিয়ে ?

৩) এলোমেলো বর্ণগুলি সাজিয়ে শব্দ তৈরি কর :

৩×১=৩

- ক) জ রা হা ম -
খ) সা ব্য ব -
গ) ল ফু নি দা -

৪) বাক্য রচনা করো:

২×১=২

- ক) গাড়ি -
খ) সং -

বিভাগ - খ

১) বন্ধনীর মধ্যে থাকা শব্দ দিয়ে শূন্যস্থান পূরণ কর :

৩×১=৩

(মিথ্যা, কুবাক্য, অবাধ্য)

ক) কদাচ পিতামাতার _____ হইও না ।

খ) _____ কথা বড় দোষ ।

গ) যে _____ কথা কয় , কেহ তাহাকে ভালোবাসে না ।

২) য - ফলা যুক্ত দুটি শব্দ লেখো :

২

UNIT TEST-I

SUBJECT: HINDI

FM - 20

ক) दिए गए प्रश्नों के उत्तर में (✓) का निशान लगाइए।

1 × 5 = 5

- 1) कविति में चाचा किसि कहा गया है ?
i) चड़ियीं को () ii) सूरज को () iii) फूलों को ()
2) कौन मुस्कुरा रहे हैं ?
i) फूल () ii) बच्चे () iii) काँटे ()
3) सब जानवर मलिकर कहाँ रहते थे ?
i) चंपकवन () ii) सुंदरवन में () iii) नंदनवन में ()
4) "अरे! कहा चले आ रहे हो बेगुनराम ?"
i) आलूने () ii) पालक ने () iii) भड्डी ने ()
5) मीठी बोली में कौन संदेश दे रहा है ?
i) बुलबुल () ii) चड़िया () iii) कोयल ()

ख) नीचे दिए गए शब्दों को उनके उल्टे अर्थों से मिलाओ।

1 × 4 = 4

- | | |
|----------|-------------|
| 1) नया | i) पास |
| 2) मीठी | ii) रोना |
| 3) सुबह | iii) पुराना |
| 4) दूर | iv) कड़वी |
| 5) हँसना | v) शाम |

ग) नीचे लखी व्यंजनों में मात्रा लगाकर नए शब्द बनाइए।

1 × 5 = 5

- 1) पल
- 2) बर
- 3) मर
- 4) खर
- 5) फल

घ) निम्नलिखित में से कनिही तीन प्रश्नों का उत्तर लखिए।

2 × 3 =

6

- 1) वर्ण कतिने प्रकार के होते हैं ? नाम लखिए
- 2) स्वर की संख्या कतिनी होती है ?
- 3) कविता में सूरज को क्या कहा गया है ?
- 4) एक दिन छोटे बंदर को क्या मिला ?

UNIT TEST-I

SUBJECT: MATHEMATICS

FM - 20

A. FILL IN THE BLANKS:

(1×6=6)

1. Number name of: 146
2. Write in number for: 8 tens 2 ones
3. Fill with >, < or =: 108 ___ 180
4. What comes before: 170
5. What comes after: 199
6. Expand: 145

B. ADD THE FOLLOWING COLUMN WISE:

(1×5=5)

1. 137 + 27
2. 143 + 49
3. 101 + 99
4. 34 + 27
5. 56 + 100 + 13

C. SUBTRACT THE FOLLOWING COLUMN WISE:

(1×5=5)

1. 143 - 55
2. 99 - 81
3. 200 - 44
4. 137 - 23
5. 62 - 38

D. SOLVE:

(2×2=4)

1. A book had 100 pages. Ram read 65 pages. How many pages are left to read?
2. In a kitchen, there are 57 spoons, 110 bowls and 29 glasses. What is the total number of utensils?

UNIT TEST-I

SUBJECT: EVS

FM - 20

1) Fill in the blanks:-

(1x5)=5

- a) Fleshy part of the plant is called _____.
- b) Earthworm helps to make the soil _____.
- c) Spinach and cabbage is the _____ part of a plant.
- d) The seed of plants crushed to make _____
- e) The animal that stay with us in our home is called _____

2) Write the statement true or false:-

(1x5)=5

- a) Flowers is the kitchen of the plants-
- b) Oat,maize,barley are the example of cereals-
- c) Branches,leaves,flowers are grow on a stem of a plant-
- d) We get suger from onion plant-
- e) Hens and ducks gives us milk-

3) Match the following-

(1x5)=5

Flowers
Vegetables
Cotton
Silkworm
Donkey

We get silk
Cotton plant
They produced fruits
Carry heavy loads
Tomato,potato

4) Write the answer in one line:-

(1x5)=5

- a) Name the different parts of a plant?
- b) Name any 5 food items we get from plants?
- c) What are pet animals?
- d) Why are plants called primary producers?
- e) What is plant life cycle?

UNIT TEST-I

SUBJECT: M.Sc.

FM - 20

5) Fill in the blanks:-

(1x5)=5

- f) Yoga keeps us _____.
- g) There was once a very boastful _____.
- h) The Mountain can carry _____ on its back.
- i) The name of the father of Radhe is _____
- j) _____ is everywhere and sees whatever we are doing.

6) Write the statement true or false:-

(1x5)=5

- f) "Can you crack this nut"-Mountain said to the Squirrel.-
- g) We should respect each other-
- h) The Mountain is very small and weak-
- i) Badri was a doctor in profession-
- j) Badri went to steal some crops with his son-

7) **Match the following-**

(1x5)=5

Boastful
Intelligent
Badri
Radhe
God

Watching us everytime
A farmer
The Squirrel
The Mountain
Used to listen bedtime stories

8) **Write the answer in one line:-**

(1x5)=5

- f) What was the behaviour of the Mountain?
- g) Who won the challenge?
- h) What was the name of the farmer?
- i) Why there were no crops in the field?

‘Almighty Is Universal’- what was the moral of this story?

UNIT TEST-I

SUBJECT: GK

FM - 20

1) **Fill in the blanks:-**

(10x1)=10

- a) The bird never build its own house is _____.
- b) A group of lions is called _____.
- c) The farmer’s friend insect is _____.
- d) We get perfume from _____ plant.
- e) The national flower of India is _____.
- f) Spinach is the _____ part of a plant.
- g) Jaipur is known as the _____ city.
- h) The first home minister of India is _____.
- i) The famous food of Maharashtra is _____.
- j) An egg giving animal is _____.

2) **Write the statement True or False:-**

(5x1)=5

- a) The national symbol of New Zealand is Kiwi bird –
- b) A group of fish is called ‘A school of fish’ –
- c) We get cloth from cocoa plant –
- d) The famous sweet of west Bengal is Rasogulla –
- e) Mother Teresa was honoured with ‘Netaji’ –

3) **Match the following:-**

(5x1)=5

Cow
Honeybee
Coconut
Potato
Hawa Mahal

we get hair oil
king of vegetables
jaipur
gives us milk
gives us honey

UNIT TEST-I

SUBJECT: COMPUTER

FM - 20

A. Choose the correct option.

(1×3=3)

1. Which of the following can take decision on its own?

- a) Computer. b) Book. c) Human.

2. Which of the following is the brain of the computer

- a) Pen drive b) CPU c) Monitor

3. Which of the following devices is used to draw pictures?

- a) Mouse b) Printer c) Headphone

B. Fill in the blanks.

(1×3=3)

1. Hard disc is fixed inside the _____ box.

2. In _____ computer is used to keep fee records of students.

3. A _____ is used to point at things on the monitor.

C. Write T for true and F for false.

(1×3=3)

1. Scanner is used to type words. []

2. CPU works like the brain of the computer. []

3. Computers make our work difficult. []

D. Rearrange the letters to get meaningful words.

(1×3=3)

1. P U I N T = _____

2. U O P U T T = _____

3. U T E R O C M P = _____

E. Answer the following questions.

(2×4=8)

1. What is the full form of IPO?

2. How computers are useful to doctors?

3. Name any two input and output devices.

4. Write any one difference between man and computer.

UNIT TEST-I

SUBJECT: DRAWING

GRADE: A/B/C

1. Draw a House and colour it.

Or

Draw a 'Starfish' and colour it.

HALF YEARLY EXAMINATION

SUBJECT: ENGLISH

FM - 60

A. Choose the correct option:-

(1×5=5)

1. Mum can't lift Shanu up because she is too -----
i) big ii) small
2. Who saw the mouse first?
i) Ma ii) Grandma
3. Rhyming word of 'make' is -----
i) take ii) pack
4. The bear landed in a -----
i) den ii) cave
5. The words 'a' and 'an' are used before -----
i) pronouns ii) nouns

B. Fill in the blanks:-

(1×5=5)

1. Pa pulled the ----- down, when he saw the mouse.
2. _____ sleeps exactly like a 'V'.
3. The little boy lost his _____ .
4. The rabbit landed in a _____
5. Fill with a or an.
i) ----- inkpot. ii) ----- flower

C. Who said these words?

(1×5=5)

1. ' Do you call that a roar, Mr Jackal?' _____.
2. ' I will chase it out!' _____.
3. 'Catch him!' _____.
4. ' The mitten is so warm. Let me sleep for a while.' _____.
5. ' Wonder how the mitten grew so big! Why is it torn?' _____.

D. Write 'T' for true and 'F' for false:-

(1×5=5)

1. Ma took out the stick and poked it here and there.
2. The cat looked at the mouse and flew under the bed.
3. opposite word of 'up' is down.
4. The fox found the mitten first.
5. Describing words are also called adjectives.

E. Match the following:-

(1×5=5)

COLUMN A	COLUMN B
F) Honey	a. Ice cube
G) Lemon	b. Flower
3. Soft	c. Sour
H) Cold	d. Sweet
I) Yellow	e. Pillow

F. Fill in the blanks with correct form of the words given in brackets.

(1×5=5)

1. A giraffe is _____ than a zebra. (tall)
2. My dress is _____ than my sister's dress. (beautiful)
3. Boiled water is _____ than the tap water. (clean)
4. An apple is _____ than an orange. (sweet)
5. My grandmother is _____ than me. (old)

G. Answer the following questions:-

(2×10=20)

1. What happens to the caterpillar when he dies?
2. Why was Papa Lion disappointed and angry?
3. Why did Grandma scream?
4. How does Tommy sleep?
5. Why did the animals want to get into the mitten?
6. Write two special names for each common name.
i) bird ii) day
7. Write the plural forms of the following nouns.
i) Piano ii) Key
8. Rewrite the following sentences by using correct pronouns.
i) Where is your English book? Please give your English book to me.
ii) My friend and I are going to play. My friend and I play badminton.
9. Underline the correct Belonging Words.
i) She is driving her car.
ii) I have completed my homework.
10. Correct the words and rewrite the sentences.
i) It is more hot here than our city.
ii) This mountain is high than that one.

H. Write the meanings of the following words.

- 1) Screamed 2) Scurrying**

(2×2=4)

I. Write a small paragraph (six lines) on 'My Family'.

(6)

HALF YEARLY EXAMINATION

SUBJECT: BENGALI

FM - 60

বিভাগ - ক

- ১) 'ওইখানে মা পুকুর পাড়ে' - কবিতাটি কবির নাম সহ প্রথম আট লাইন লেখো। ৮
- ২) সঠিক উত্তরে টিক(✓) চিহ্ন দাও : ১৫×১=১৫
- ক) কী বার জঙ্গল সাফ করা হয় - (সোমবার / মঙ্গলবার / বুধবার)।
- খ) আজ মঙ্গলবার গল্পে, যে পতঙ্গের কথা আছে - (পঙ্গপাল / ফড়িং/ মশা)।
- গ) চন্দননগর থেকে আসবেন - (সদানন্দবাবু /অমলেন্দু বাবু/ আনন্দ বাবু)।
- ঘ) সন্ধ্যা হলে ঘরে দিতে বলা হয়েছে- (ধূপের গন্ধ /ধূনোর গন্ধ /সন্ধ্যা প্রদীপের গন্ধ)।
- ঙ) _____ কে বলে দিও তার আতিথেয় যেন খুঁত না থাকে (ইন্দু/ গোপাল/ রামবাবু)।
- চ) _____ কে রেখো পাশের ঘরেই (বিন্দু/ দীনবন্ধু/ শ্যাম)।
- ছ) বর্ষা নেমেছে _____ আর নেই (শীত / বর্ষা / গর্মি)।
- জ) ঝরনার জল বেড়ে উঠলো (কুমায়ুন পর্বতে /ডুলাং পর্বতে/ শিলং পর্বতে)।
- ঝ)বন্যা দেখা দিয়েছে-(তিস্তা নদীতে/ কর্ণফুলী নদীতে/ উশ্রী নদীতে)।
- ঞ) (কাঠবেড়ালি / মাছরাঙা / পাখি) - হাত থেকে ধান থাকে।
- ট) (শেয়ালরা/ রাক্ষসেরা /বাঘেরা) ঝোপে ঝাড়ে মারবে উঁকি আড়ে আড়ে।
- ঠ) দেখবে আমি দাঁড়িয়ে আছি (বন্দুক /ধনুক/ ছিপ) নিয়ে হাতে।
- ড) খাস্তা কচুরি পাওয়া যায়- (বসন্তের দোকানে/ সুমন্ত দোকানে /অনন্তর দোকানে)।
- ঢ) তোরঙ্গ শব্দের অর্থ - (ধূপ / বাত্র/ বস্তা)।
- ণ) বস্তা থেকে গুণতি করে আলু আনতে হবে (কুড়িটা /পঁচিশটা /ত্রিশটা)
- ৩) বন্ধনীর মধ্যে থাকা শব্দ দিয়ে শূন্যস্থান পূরণ করো। ৫×১=৫
- (কাজকর্ম , কাকগুলো, রোদুর , পুবের , দর্মার)
- _____ যেই আসে পড়ে।
- _____ মুখে কোথা ওড়ে।
- দলে দলে ডাক দিয়ে _____।
- _____ বেড়া ভেঙে গেলো।
- চাষিদের _____ সব বন্ধ হলো।
- ৪) এলোমেলো বর্ণ সাজিয়ে শব্দ তৈরি করো: ৫×১=৫
- উ লা ত ঝা , ন ব সী বা , আ ন্দ ক , ল ফু নি দা , ম বা দা ।
- ৫) নীচের প্রশ্ন গুলির উত্তর দাও : ১০×১=১০
- ক) জঙ্গল সাফ করার জন্য সঙ্গে কী কী নিতে হবে ?
- খ) কার ঘরে ফুলদানি রাখতে বলা হয়েছে ?
- গ) কার আঙিনায় জল ঢুকেছে ?

- ঘ) কর্তাবাবু কী পরে চলেছেন ?
 ঙ) হরিণদের শিং গুলি কেমন ?
 চ) এবার কী খুব সম্ভা ?
 ছ) বাজার থেকে কী মাছ আনতে বলা হয়েছে ?
 জ) আলু না পেলে কী আনতে বলা হয়েছে ?
 ঝ)কে থালা বজায় ?
 ঞ)কবি গরুর গাড়ি চড়ে কোথায় যেতে চেয়েছেন ?

৬) বাক্য রচনা করো :

২×১=২

সম্ভা, সুন্দর ।

বিভাগ - খ

১) অর্থ লেখো :

৪×১=৪

প্রত্যহ, ক্রোধ, মূর্খ, হর্ষ ।

২) এলোমেলো বর্ণ গুলিকে সাজিয়ে সঠিক শব্দ তৈরী করো:

৪×১=৪

ল্ল অ, ভ দুর্ল, আ য় ল্লে, বি ব ল্ল ।

৩) নীচে দেওয়া সঠিক শব্দ বেছে নিয়ে শূণ্যস্থানে বসাতো ।

৫×১=৫

(ভ্রাতা, পদ্ম, আশ্বিন, দুর্লভ, অবসন্ন)

ক) দুর্গাপূজা হয় _____ মাসে ।

খ) ভাই কে বলা হয় _____ ।

গ) তিন মাইল হাঁটার পর শরীর _____ ।

ঘ) শরৎ কালে _____ ফুল ফোটে ।

ঙ) যাহা সহজে পাওয়া যায় না _____ ।

৪) নীচের প্রশ্ন গুলির উত্তর দাও ।

২×১=২

ক) যাদবের বয়স কত ?

খ) কাহারো চিরকাল দুঃখ পাইবে ?

HALF YEARLY EXAMINATION

SUBJECT: HINDI

FM - 60

क) सही उत्तर चुनकर (✓) का निशान लगाए।

1 × 5 = 5

1) पानी बरसने से क्या भर गया?

i) बाल्टी () ii) ताल () iii) कुएँ ()

2) बच्चों ने पानी में क्या चलाई?

i) रेल () ii) नाव () iii) कार ()

3) सड़क पर जाते हुए बालिका ने क्या देखा?

i) तितली () ii) मेढक () iii) कुत्ता ()

4) अंकुश कैसा लड़का था?

i) शरारती () ii) होशियार () iii) घमंडी ()

5) पिंजरे में सब कैसे लग रहे थे?

i) सुंदर () ii) खुश () iii) उदास ()

ख) दिए गए शब्दों के अर्थ लिखें। (कोई पाँच)

1 × 5 = 5

1) पानी 2) नाव 3) उदास 4) प्रसन्न 5) सहपाठी 6) अब्बा

ग) मैं या मैं लगाकर वाक्य पूरे करो।

1 × 5 = 5

1) होली ___ रंग लगाते हैं।

2) ___ दीवाली पर मिठाई खाता हूँ।

3) ___ सबके साथ प्यार से रहता हूँ।

4) सब नगर- कीर्तन ___ जाते हैं।

5) दीवाली ___ पटाखें जलाते हैं।

घ) निम्नलिखित प्रश्नों के उत्तर अति संक्षिप्त में दीजिए।

1 × 5 = 5

1) टर्- टर् कौन करने लगा?

2) दीवाली पर हम क्या जलाते हैं?

3) आपको वर्षा का मौसम कैसा लगता है?

4) बालिका कहाँ घूम रही थी?

5) अध्यापिका ने किसकी प्रशंसा की?

ड) संक्षिप्त प्रश्नों के उत्तर दो। (कोई पाँच)

2 × 5 = 10

- 1) संयम के सहपाठियों के क्या नाम थे?
- 2) बरसात के मौसम में क्या - क्या होता है?
- 3) अध्यापिका ने संयम को क्या समझाया?
- 4) ईदी कब और किससे माँगते हैं?
- 5) होली पर हम क्या करते हैं?
- 6) ताल- तलइया किससे भर गए?

खण्ड - ख (व्याकरण)

क) दिनों के नाम लिखें।

1 × 10 = 10

ख) दिए गए शब्दों के लिंग परिवर्तन करें। (कोई पाँच)

1 × 5 = 5

- 1) लड़का
- 2) बुढ़िया
- 3) राजा
- 4) मोर
- 5) पुत्र
- 6) नाना

ग) दिए गए शब्दों के वचन बदलें। (कोई पाँच)

1 × 5 = 5

- 1) बच्चा
- 2) कार
- 3) पंखा
- 4) पत्ता
- 5) केला
- 6) चूहा

घ) नाम लिखें।

2 × 5 = 10

- 1) दो फूल
- 2) दो जानवर
- 3) दो फल
- 4) दो सब्जी
- 5) दो पक्षी

HALF YEARLY EXAMINATION

SUBJECT: MATHEMATICS

FM - 60

A. Fill in the blanks:-

(1×11=11)

1. Write the number name of 40
2. Write the number for 3 tens 2 one
3. Write the before number of 140
4. Expand 489
5. Write the number for 600 + 20 + 3
6. Write the after number of 999
7. Arrange in ascending order- 109, 97, 140, 209
8. Compare using >, < or = 852 ____ 825
9. Write number name of 714
10. Write the ordinal number name of 10
11. 601 is odd or even number?

B. Fill in the missing numbers:-**(1×5=5)**

1. $6 \times \underline{\quad} = 6 \times 8$
2. $\underline{\quad} \times 5 = 0$
3. $8 \times \underline{\quad} = 8$
4. $5 + 6 = \underline{\quad} + 5 = 11$
5. $10 - 3 = \underline{\quad}$

C. Solve the following column wise:-**(2×5=10)**

1. 47×8
2. 56×9
3. $586 - 147$
4. $436 - 378$
5. $348 + 431$

D. Match the following:-**(1×5=5)**

COLUMN A	COLUMN B
1. 7×3	a. 11
2. $5 + 6$	b. 21
3. $9 - 3$	c. 36
4. 6×6	d. 72
5. 9×8	e. 6

E. Do as directed:-**(2×5=10)**






1. Skip counting in 2s- 10, $\underline{\quad}$, $\underline{\quad}$.
2. Skip counting in 3s- 81, $\underline{\quad}$, $\underline{\quad}$.
3. Skip counting in 5s- 65, $\underline{\quad}$, $\underline{\quad}$.
4. Skip counting in 10s- 70, $\underline{\quad}$, $\underline{\quad}$.
5. Skip counting in 100s-300, $\underline{\quad}$, $\underline{\quad}$.

F. Answer the following questions:-**(2×5=10)**

1. There are 6 cars with 4 people in each car. How many people are there in all?
2. Deepa had 168 pencils. She gave 68 pencils to her brother. How many pencils are left with her?
3. In a cricket match, team A scored 677 runs and team B scored 688 runs. Which team scored more runs and how many?
4. To make a flower rangoli, Meera bought 750 flowers. She used 725 flowers. How many flowers are left unused?
5. Basket A has 300 tomatoes and basket B has 236 tomatoes. How many tomatoes are there in all?

G. Choose the correct options for the following:-

(1×5=5)

1.  (straight line / curved line)
2.  (curved surface / plane surface)
3.  (rolling / sliding)
4.  ($\frac{1}{2}$ / $\frac{2}{4}$)
5.  ($\frac{1}{2}$ / $\frac{1}{4}$)

H. Draw cube and cylinder and write their face and edges:-

(2×2=4)

HALF YEARLY EXAMINATION

SUBJECT: EVS

FM - 60

1) Fill in the blanks:-

(10X1)=10

- a) Forests, deserts, mountains, rivers are the example of different type of _____.
- b) Some animals dig _____ in the ground to live.
- c) The adult human body has _____ bones.
- d) The first and the most important meal of the day is _____.
- e) The process by which plants makes their food is called _____.
- f) An example of aquatic animal is _____.
- g) Zebras are the _____ animal.
- h) _____ give shape to our body.
- i) We should keep proper _____ between the meals.
- j) The _____ protect our brain.

2) Choose the correct answer and write the sentence:-

(6X1)=6

- a) Rabbit is a _____ animal.
(i) Herbivorous (ii) carnivorous (iii) omnivorous
- b) The point where two bones meet together is called-
(i) Heart (ii) Muscle (iii) joint
- c) Exercise makes our muscles ____
(i) Weak (ii) Strong (iii) Stiff
- d) We should have more meals with ____ amount of food.
(i) More (ii) Huge (iii) Less
- e) Bones bears the entire ____ of the body.
(i) Height (ii) Weight (iii) joint
- f) We can divide food we eat into ____ main categories.
(i) Three (ii) ten (iii) Six

- 3) **Write the statement true/ false:-** (6X1)=6
- a) Some animals lives in burrows, they store food and find shelter in it-
 - b) Koala is a wild animal -
 - c) Spiders are lives in hive -
 - d) Tiger is a water animal -
 - e) Bones are covered with muscles –
 - f) The process by which plants make their food is called life cycle-

- 4) **Give two example of each:-** (5X2)=10
- a) Energy giving food-
 - b) Animals that gives us wool-
 - c) External body parts-
 - d) Common drinks in the world-
 - e) Habitat-

- 5) **Answer the following:-** (6X2)=12
- a) What are nutrients?
 - b) What is habitat?
 - c) What is the skeleton?
 - d) Write any two healthy eating habits.
 - e) What are fibres of plant used for?
 - f) What do plants need to make their food?

- 6) **Match the following:-** (10X1)=10
- | | |
|--------------------------|-------------------------|
| Radish | Makes us healthy |
| Lion | Gives us wool |
| Rib cage | Root part of a plant |
| Web | lives in den |
| Walking,jogging,swimming | Plant's kitchen |
| Sheep | Protect heart and lungs |
| Leaves | Home of spider |
| Skin | Smallest bone |
| Stirrup | An external body parts |

- 7) **What is a plant life cycle? Draw the life cycle of a plant.** (1+5)=6

A) Fill in the blanks:-

(20X1)=20

- 1) The bird can store food in its beak enough for a week is _____.
- 2) _____ helps in carrying loads.
- 3) A group of geese is called _____.
- 4) The insect have 12 eyes and a poisonous sting is _____.
- 5) We get chocolate from _____ tree.
- 6) We get oil from this flower. It is _____.
- 7) Turnip is a _____ part of a plant.
- 8) Amer Fort is located in _____.
- 9) _____ is the first prime minister of India.
- 10) The famous food of Rajasthan is _____.
- 11) The festival of light is called _____.
- 12) Zend Avesta is the sacred book of _____.
- 13) We obtain gum from _____.
- 14) The flower blooms in water and smaller size than lotus is _____.
- 15) _____ is called the 'king of vegetables'
- 16) Pumpkin is the _____ part of a plant.
- 17) _____ is the most common dress for women in India.
- 18) The festival in which sisters ties Rakhi on their brothers hand is _____.
- 19) The bridge located in London, England is _____.
- 20) The great wall of _____ is the largest wall in the world.

B) Answer the following questions:-

(12X2)=24

- 1) Write a name of one of the seven modern wonders of the world?
- 2) What is the name of the bridge which located in Kolkata, on river Hugli?
- 3) What is the name of the sacred book of Christianity?
- 4) What is the festival that celebrates the victory over evil?
- 5) Biryani is the famous food of which state?
- 6) Which city is known as 'Pink City'?
- 7) Who was Mother Teresa?
- 8) Bell paper is which part of a plant?
- 9) What is the name of the largest flower in the world?
- 10) From which plant we get perfumes?
- 11) Who is called fibre giving insect?
- 12) What is the name of the bird which can run faster than horses?

C) Unscrambled word:-

(6X1)=6

- 1) It's a vegetable- AHCIPSN
- 2) It's a flower – TOLUS
- 3) It's a plant – CNOTTO
- 4) It's a food – KLOAHD
- 5) It's a festival – IDE
- 6) It's a Monument- AJT HMAAHL

D) Match the following:-

(10X1)=10

The bridge in Rishikesh	Makes honey
Pongal	Paris-France
Chhole-bhature	used to make garlands
Virat Kohli	with coriander leaves
Sweet Potato	Stem part of a plant
Marigold	festival of Tamil Nadu
We make chutney	Opera House
Honeybees	Lakshman Jhula
Eiffel Tower	A famous Indian
Sydney-Australia	Famous food of Punjab

HALF YEARLY EXAMINATION

SUBJECT: M.SC.

FM - 60

1) Fill in the blanks:-

(10x1)=10

- a) An old man lived with his _____ sons in a village.
- b) "I order you to break this bundle of sticks into two"- said the _____.
- c) The brothers understood the power of _____.
- d) Yoga makes you _____.
- e) God is _____ and watches our all good and bad deeds.
- f) After separate the sticks from the bundle, the sons can _____ each sticks into two.
- g) Yoga is an ancient art which originated in _____.
- h) Everyone is _____ in its own way.
- i) The Mountain did not _____ anyone.
- j) Yoga _____ your muscles.

2) Choose the correct answer and write the full sentence:-

(10x1)=10

- a) The Mountain carry _____ on his back
(i) Rivers (ii) Forest (iii) Trees
- b) We must respect each other because-
(i) We like the Mountain (ii) Everyone is foolish (iii) Everyone have talent and they are unique in their own way

- c) The another meaning of 'Boastful' is-
- (i) Clever (ii) Strong (iii) Foolish
- d) "Your brothers say you are weak"- said by –
- (i) The father (ii) The brothers (iii) None of them
- e) Yoga builds our _____
- (i) Playing power (ii) Concentration power (iii) None of them

3) Answer the following :- **(5x2)=10**

- a) What was the cheat's intention?
- b) What was the nature of Squirrel?
- c) Who was watching over Badri?
- d) 'Eternity lies in unity' - what is the moral of this story?
- e) "Can you crack this nut" – Who said this? And to whom?

4) Make sentence by using following words:- **(5x1)=5**

- a) Unity-
- b) Promise-
- c) God-
- d) Village-
- e) Story-

5) Write the sentence true or false:- **(5x1)=5**

- a) Mr. Mountain respected the small creatures that lived on it-
- b) The farmer told bed-time stories to his son-
- c) The squirrel cracked the nut with its teeth-
- d) Badri was ashamed for his work and returned home empty handed-
- e) We should not pray to god everyday-

6) Unscrambled words:- **(5x1)=5**

- a) INEMAF b) GTHFI c) ODG d) MRHA e) NIYTU

7) Write five benefits of yoga:- **(5x1)= 5**

8) Write one word answers for followings:- **(5x2)=10**

- a) What did the brothers do?
- b) How many sons did the man have?
- c) Why should we do yoga?
- d) "wait father someone is watching you"- who said this?
- e) Who used to listen bedtime stories?

1. Choose the correct option.

(1×5=5)

- a) Which of the following devices is used to draw pictures?
(i) printer (ii) speaker (iii) mouse
- b) Which is the first thing you switch on to start the computer?
(i) UPS (ii) monitor (iii) CPU
- c) Which key helps you to type letters in capital?
(i) Num lock (ii) Enter (iii) Caps lock
- d) Which of the following devices is also known as USB flash drive?
(i) Headphone (ii) Microphone (iii) Pen drive
- e) Which key helps you to remove type towards or numbers?
(i) Shift (ii) Caps lock (iii) Del

2. Fill in the blanks.

(1×5=5)

- a) After pressing the main power switch, you need to switch on the _____.
- b) A _____ is used to point at things on the monitor.
- c) Hard disc is fixed inside the _____ box.
- d) To _____ a computer means switching off the computer.
- e) Once you have switched on the CPU, you need to switch on the _____.

3. Answer in one word.

(1×6=6)

- a) Which is the first screen that appears on starting a computer?
- b) Which key is used to give blank space between two words?
- c) Which device is used to point at things on the monitor?
- d) Which is the longest key on the keyboard?
- e) What are the small pictures on the desktop called?
- f) Which button has shutdown option?

4. Answer the following questions.

(2×7=14)

- a) What is double click used for?
- b) Which button opens the start menu?
- c) Write any one use of Shift Key.
- d) Name any two Input and output devices.
- e) Name the different types of mouse.
- f) What is an icon?
- g) Name the devices in which you can store your work.

Q.1 Draw a 'Butterfly' or "Flowers in the garden' with suitable colours.

UNIT TEST-II

SUBJECT: ENGLISH

FM - 20

A) Fill in the blanks: -

(1x5) =5

- 1) The child in the poem "The Furry Home" imagines that he is a ----- .
- 2) Rhyming word of 'mouse' is -----.
- 3) The four friends lived in a -----
- 4) The word 'rescue' means -----
- 5) There ----- birds on the tree. (Use am/is/are)

B) Write T for true and F for false.-

(1x5)= 5

- 6) The crow nibbled on the net and freed the deer. -----
- 7) The word 'darted' means flew quickly .-----.
- 8) Opposite word of 'Dirty' is 'clean'.-----
- 9) Winter is the right season to eat watermelons . -----
- 10) Neema loves food. -----

C) Answer the following questions.

(2x5=10)

- 11) How did the mouse save the deer ?
- 12) Why was Neema's tongue blue in colour?
- 13) Choose the correct action word in each sentence.
 - i) The birds (chirp/chirps) on the tree.
 - ii) A snail (crawl/crawls) slowly on the ground.
- 14) Fill in the blanks with has/have.
 - i) He ----- two pencils.
 - ii) We ----- books.
- 15) Fill in the blanks with suitable verbs from the options given in brackets.
 - i) A fruit seller ----- fruits.(sell/sells)
 - ii) Cobblers ----- shoes. (mend/ mends)

UNIT TEST-II

SUBJECT: BENGALI

FM - 20

১. "আকাশ-পারে" কবিতার প্রথম দুটি শব্দক কবির নাম সহ মুখস্থ লেখ।

৫

২. সঠিক বিকল্প বেছে লেখো:-

৪

ক) শেয়াল ডাকছে (উল্লাপাড়ার মাঠে/বাঁশবনে/আমবনে)।

খ) (গরমে/ বৃষ্টিতে/ বরফে) ভিজলে অসুখ করবে।

গ) কুন্ডুদের বাড়িতে চং চং করে (ছটার /নটার /দশটার) ঘন্টা বাজে।

ঘ) (চারটে/ তিনটে/পাঁচটি) শালিখ ঝগড়া করে রান্নাঘরের চালে ।

৩. শব্দার্থ লেখ:-

২

ক) কিঞ্চিৎ খ) শীঘ্র

৪. প্রশ্নের উত্তর লেখ :-

(৬×১=৬)

ক) কে দরজায় ধাক্কা দিচ্ছে ?

খ) কোথায় রোদ বেঁকে পড়ে ?

গ) ঘরের মধ্যে কী আসে ?

ঘ) মেঘে-ওড়া ঘোড়ার নাম কী ?

ঙ) কে ছাতা খুঁজে নিয়ে আসবে?

च) चोखेर पाता मेले के जेगे ओठे ?

५. मिश्र अक्षरों के तिन टि शब्द लेख :-

क) झ थ) झ ग) ङ

७

UNIT TEST-II

SUBJECT: HINDI

FM - 20

1) सही उत्तर चुनकर (✓) का निशान लगाओ।

1 × 5 = 5

क) मधुर के मामा जी कहाँ रहते हैं ?

i) इजराइल () ii) अमेरिका () iii) कनाडा ()

ख) बच्चे के जन्म पर कौन पेड़ लगाता है ?

i) मामा () ii) पिता () iii) दादा ()

ग) नौकरों ने आम किसमें सजाए ?

i) थाल में () ii) टोकरी में () iii) प्याली में ()

घ) अकबर को क्या सूझा ?

i) सुझाव () ii) मजाक () iii) उपाय ()

ङ) " अच्छा , तुम यूँ नहीं मानोगे। "

i) आदमी ने () ii) घोड़े ने () iii) भैंस ने ()

2) सही शब्द चुनकर वाक्य पूरे करो।

1 × 5 = 5

क) पेड़ों पर बड़े- बड़े _____ लटक रहे थे। (अंगूर / आम)

ख) _____ ने आम तोड़े। (सैनिकों / नौकरों)

ग) आपका थाल _____ पड़ा है। (भरी / खाली)

घ) यह सुनते ही सब _____ लगे। (हँसने / रोने)

ङ) बैठने के लिए _____ बिछाया गया। (कुरसी / आसन)

3) दिए गए प्रश्नों के उत्तर लिखें।

1 × 5 = 5

क) अकबर कहाँ टहल रहे थे ?

ख) पेड़ों पर क्या लटक रहे थे ?

ग) इजराइल कैसा क्षेत्र है ?

घ) भैंस का दूध कैसा होता है ?

ङ) घास के मैदान में भैंस के साथ कौन चर रहा था ?

4) ऊपर दिए गए शब्दों में कुछ नाम शब्द और नाम के स्थान पर आने वाले शब्द आपस में मिल गए हैं।

1 × 5 = 5

उन्हें अलग करके लिखें-

(राम , मैं , तुम , उसे , राज , यह , वह , पुस्तक , पक्षी , इसका)

नाम शब्द

नाम के स्थान पर आनेवाले शब्द

UNIT TEST-II

SUBJECT: MATHEMATICS

FM - 20

A. FILL IN THE BLANKS:

(1×10=10)

- 1 m = _____ cm
- Re 1 = _____ p
- 3000 ml = _____ L
- 5 kg = _____ g
- Three 5- rupee coins make Rs _____
- _____ 20- rupee notes makes Rs 400
- Write in figure: Seven hundred rupees and thirty paise=
- Write in words: Rs 55. 45=
- Which unit is used to measure syrup?
- Name one non-standard unit of length.

B. SOLVE:

(2×5=10)

11. A boy drinks 200ml milk every day. How much milk will he have in 2 days?
12. Usha had Rs 100. She lost Rs 35. How much money does she have with her now?
13. Sachin bought a bat for Rs 186 and a ball for Rs 75. How much money did he spend in all?
14. Rajesh sold 14L milk on Monday and 27L milk on Tuesday. What quantity of milk did he sell in these two days?
15. A shopkeeper had 800 kg of wheat. Out of it, he sold 555 kg of wheat. How much wheat is left with him now?

UNIT TEST-II

SUBJECT: EVS

FM - 20

A) Fill in the blanks:-

(6x1)=6

1. _____ use carbon dioxide to make food.
2. When a person suffering from cold sneezes, the _____ released into air.
3. Some rainwater which seeps into the soil is called _____.
4. Water can be present in _____ forms.
5. Very strong winds cause _____ weather.
6. The _____ of the wind affects the weather condition of an area.

B) Write the statement True or False:-

(4x1)=4

7. Air does not give shape to things-
8. Pure water is colourless, tasteless-
9. Sunshine affects the weather during the day-
10. When layers of cloud cover the sky the day become bright-

C) Answer the following questions:-

(5x2)=10

11. How can we keep the air clean? Give two ways of doing so?
12. What are the forms or states in which water can exist?

13. Why do we need to filter or boil water before drinking?
14. What is wind?
15. Name the factors that affect weather.

UNIT TEST-II

SUBJECT: G.K

FM - 20

D) Fill in the blanks:-

(5x1)=5

1. People lives in flats here _____.
2. A singer name is _____.
3. The Moon is _____ our head.
4. _____ is the largest sense organ.
5. A place where aeroplanes land and take off is _____.

E) Answer the following:-

(2x5)=10

6. What is the name of a large impressive house like a haveli?
7. Write down a name of a musician?
8. Which sense organ helps us to taste different kinds of foods?
9. What is the name of an underground passage that built under a hill or a river?
10. Fill with proper preposition: The Sun sunk _____ the horizon.

F) Match the following:-

(5x1)=5

- | | |
|-----------------------|--------------------------------|
| 11. Prabhu Deva | a. 7:50a.m |
| 12. Robin Hood | b. A road built over the river |
| 13. Ears | c. A dancer |
| 14. Bridge | d. Famous animation movie |
| 15. I go to school at | e. Helps us in hearing |

UNIT TEST-II

SUBJECT: M.SC.

FM - 20

G) Fill in the blanks:-

(5x1)=5

1. _____ had great power to perform miracles.
2. A _____ person can never become rich.
3. A little kite sat alone on the _____.
4. "I will take you up with me"- said by_____.
5. A deep _____ in and out makes us ready for a day.

H) Answer the following:-

(5x2)=10

6. What power did Sadhu have?
7. If you were at the devotee's place, what would you do?
8. How was the kite feeling after flying?
9. What is necessary to get success in life?
10. Write two ways how we can do yoga?

I) Write suitable answer for each questions:-

(5x1)=5

11. Write any one good deed which you do on time.
12. Make sentence: Rich
13. "I am not afraid anymore"- said by_____.
14. 'Rise above your fear'- what do you learn from the lesson?
15. Unscrambled word: ARIAFD

1. Choose the correct option.**(1×3=3)**

- a. Which button is used to close Tux window?
i) Open ii) Quit iii) Save
- b. Which of the following tools is used to draw with a free hand?
i) Search ii) Text iii) Pencil
- c. Which tool is used to draw shapes with multiple sides?
i) Rectangle ii) Curve iii) Polygon shape

2. Write T for true and F for false.**(1×3=3)**

- a. Rounded rectangles are used to draw circles. []
- b. You can print your drawings by using the quit button. []
- c. A pentagon has five sides. []

3. Fill in the blanks.**(1×4=4)**

- a. _____ tool is used to select a part of the image.
- b. Save button is present in the _____.
- c. The _____ tool is used to draw free hand lines.
- d. To open a new drawing, click on _____ button.

4. Answer the following questions.**(2×5=10)**

- a. What is Magic tool?
- b. What is Selection tool?
- c. How is Stamp tool used?
- d. What do you mean by foreground colour?
- e. What is the use of Text tool?

Draw two 'Fish' or a 'Honeybee' and colour it:-

- iv) Who best friends are your
v) They football are playing

E. Answer the following questions:-

(2×10=20)

23. How did the crow carry the mouse?
24. Why was Neema's tongue blue in colour?
25. Why does the child wish to have two mouths?
26. Why did the mother duck sit on the eggs?
27. What kind of light does the Moon offer?
28. How did the animals get to know that the sky was not falling?
29. Write the past tense of the following verbs.
i) sit ii) go
30. Fill in the blanks with is, are, or am.
i) This ----- my book.
ii) They ----- good friends.
31. Underline the correct action words.
i) My grandfather watches TV at night.
ii) Ram goes to the market.
32. Join the sentences using and or but.
i) I want a mango. I want an apple.
ii) The tea is hot. **The coffee is cold.**
33. Write the meanings of the following words. (2×2=4)
1) Rescue 2) ugly

34. Write a small paragraph (six lines) on 'Winter Season'.

(6)

ANNUAL EXAMINATION, 2023-24

SUBJECT: BENGALI

FM - 60

১. "একদিন রাতে আমি স্বপ্ন দেখিনি"- কবিতাটি কবির নাম সহ আট লাইন মুখস্থ লেখো । 8
২. সঠিক উত্তরের নিচে দাগ দাও : (18×1)
- ২.১ গান গাইতে এসেছে- ক> কানাই খ>বিহারী গ>বোষ্টমী ।
- ২.২ বৃষ্টিতে ভিজলে- ক> অসুখ করবে খ>শরীর ভালো থাকবে গ>মজা হবে ।
- ২.৩ রোদ উঠেছে- ক> বাঁশের ডালে খ>আমের ডালে, গ>জামের ডালে ।
- ২.৪ ক> তিনটে খ> চারটে গ>পাঁচটি - শালিখ ঝগড়া করে ।
- ২.৫ পূজোর- ক> সানাই খ>ঘন্টা গ>টোল বাজায় দূরে ।
- ২.৬ বাঘের খাবা ছিল- ক>কাদায় খ>ধুলোয় গ>বালির ওপর।
- ২.৭ বাঘ এসেছে- ক> নন্দীগ্রামে খ>সন্ধিপুর্বে গ>বিপ্রগ্রামে ।
- ২.৮ আক্রম খেল চাটনি দিয়ে- ক> রুটি খ>লুচি গ>ভাত ।
- ২.৯ চেয়ে দেখা বলে যেন- ক> বিনু খ>রবি গ>শশী ।
- ২.১০ ক>পাটনা খ>দিল্লি গ>কলিকাতা- চলিয়াছে নড়িতে নড়িতে ।

২.১১ উদ্ধব মণ্ডল জাতিতে- ক> কায়স্থ খ>সদগোপ গ>ব্রাহ্মণ ।

২.১২ ধনঞ্জয় উদ্ধবের - ক> পেয়াদা খ>চৌকিদার গ>চাকর ।

২.১৩ ক>অঞ্জনা খ>বঞ্জনা গ>খঞ্জনা -নদী তীরে চন্দনী গাঁয়ে ।

২.১৪ আছে এক লেজ-কাটা ভক্ত- ক> কুকুর খ>বিড়াল গ>গরু ।

২.১৫ পৃথিবীতে- ক> পিতামাতা খ>ভাই-বোন গ>কাকু-কাকিমা, অপেক্ষা বড় কেহ নাই ।

২.১৬ তোমরা কদাচ পিতা-মাতার ক> অবাধ্য খ>বাধ্য গ>অসন্তুষ্ট হইবে না ।

২.১৭ চুরি করা বড় - ক>দোষ খ>গুণ গ>ভালো।

২.১৮ ক>ভুবন খ>বিনু গ>বিমল- বড় চোর হইয়াছে ।

৩. বিপরীত শব্দ লেখ:

(4×1)

শক্ত= , অন্ধকার= , লম্বা= , বাঁকা=

৪. বাক্য রচনা কর :

(5×1)

ছোট , জঙ্গল , ঢং ঢং , অপমান, ভক্ত

৫. এলোমেলো বর্ণ সাজিয়ে শব্দ তৈরি কর:

(5×1)

লাদান , রপ্তানি , লিকতাকা , শামল , লিখশা

৬. দু-একটি বাক্যে উত্তর দাও :

ক> সৃষ্টিধরকে কী খুঁজে আনতে বলা হয়েছে ?

1

খ> কারুরিয়ারা শক্তি বাবু আর আক্রমকে কী কী খেতে দিল ?

2

গ> মেঘে ওড়া ঘোড়ার নাম কী?

1

ঘ> শক্তি বাবু তার নৌকার কি নাম দিলেন ?

1

ঙ> কাত্যায়নী নিস্তারিনীকে কত টাকার নোট যৌতুকে দিয়েছিলেন ?

1

চ> কাহাদের সুসন্তান বলে ? কী হইলে তোমরা সুখে থাকিতে পারিবে ?

2

ছ> ভুবনের চুরির স্বভাবের জন্য কে দায়ী ? যে চুরি করে লোককে তাহাকে কী বলে ?

2

৭. মিশ্র অক্ষরের দুটি করে শব্দ লেখ :

(5×1)

ক , ফ , ন্দ্র , ক্ষ , ত্র

৮. নিচের শব্দগুলির অর্থ লেখ :

(5×1)

বন্ত্র , পুষ্প, দন্ত, পশ্চাৎ, কন্ঠ

खण्ड- क

1. सही उत्तर चुनकर (✓) का निशान लगाओ।

1 × 10 = 10

क) जंगल में कितने बंदर रहते थे ?

- i) तीन () ii) सात () iii) पाँच ()

ख) बच्चे को क्या चाहिए?

- i) खिलौना () ii) चाँद () iii) सूरज ()

ग) माँ ने थाली में क्या भरा ?

- i) चावल () ii) दूध () iii) जल ()

घ) नदी के पास कौन रहते थे ?

- i) बंदर () ii) खरगोश () iii) घोड़े ()

ङ) मेहनत का फल कैसा होता है ?

- i) कड़वा () ii) मीठा () iii) तीखा ()

च) चुनमुन ने किसे ज़मीन पर पटका ?

- i) गाजर () ii) सेम () iii) पालक ()

छ) हवाईजहाज़ वापस नहीं आया है। किसने कहा ?

- i) बिंगो हाथी () ii) टैडी भालू () iii) मीशू गुड़िया ()

ज) पाँचों बंदर आपस में क्या थे ?

- i) शत्रु () ii) मित्र () iii) भाई ()

झ) खरगोश का क्या नाम था ?

- i) टुकटुक () ii) रुनझुन () iii) चुनमुन ()

ञ) माँ कथा लेकर आई?

- i) थाली () ii) दूध () iii) रोटी ()

2. दिए गए शब्दों का अर्थ लिखें। (कोई पाँच)

1 × 5 = 5

- क) नन्हे ख) ताज ग) सुरक्षा घ) संख्या ङ) मित्रता च) खाना छ) स्वयं

3. एक या दो वाक्यों में उत्तर दे।

1 × 5 = 5

क) बन्दर घूमते-घूमने कहाँ पहुँच गए।

ख) सैर कौन कर रहे थे ?

ग) शहर के घर कैसे हैं ?

घ) हवाईजहाज़ का रंग कैसा था ?

ङ) चुनमुन अकेले क्या ढूँढ़ने निकला था ?

4. दिए गए प्रश्नों के उत्तर दे कोई पाँच।

2 × 5 = 10

क) हवाईजहाज़ पलंग के नीचे कैसे पहुँच गया ?

ख) दोनों बादल क्यों रोने लगे ?

ग) टमाटर देखकर चुनमुन ने क्या सोचा ?

घ) हम रात में चाँद के साथ और क्या देखते हैं ?

ङ) बंदरों ने शहर में क्या-क्या देखा ?

च) बिंगो हाथी को क्या चिंता हो रही थी ?

खण्ड- ख

(व्याकरण)

1. दिए गए शब्दों के कुछ अन्य नाम लिखें। (कोई पाँच) $2 \times 5 = 10$
क) कमल ख) पेड़ ग) सूर्य घ) माता इ) हवा च) फूल
2. दिए गए शब्दों के उलटे अर्थ लिखें। (कोई पाँच) $1 \times 5 = 5$
क बड़ा ख) ठंडा ग) अगला घ) आज इ) अमीर च) दिन
3. सही (✓) या गलत (×) का निशान लगाइए। $1 \times 5 = 5$
क) शुक्रवार के बाद सोमवार आता है। ()
ख) शनिवार से पहले शुक्रवार आता है। ()
ग) फरवरी में 31 दिन होते हैं। ()
घ) एक साल में 365 दिन होते हैं। ()
इ) दीवाली के दिन हम गुलाल लगाते हैं। ()
4. महीनों के नाम लिखें। $1 \times 10 = 10$

ANNUAL EXAMINATION, 2023-24

SUBJECT: MATHEMATICS

FM - 60

I. Fill in the blanks:-

($1 \times 15 = 15$)

12. Which unit is used to measure the length of a pencil?
13. 1 litre is equal to ___ ml.
14. Half past 7 is written as.
15. Rs 50 note can be changed for how many Rs 10 notes?
16. Thirty rupees and seventy five paise is expressed as
17. How many 50p coins are there in Rs 2
18. Two coins of Rs 1 = Rs. ___
19. Rs 20 note is equal to ___ Rs 5 notes
20. 1 year = _____ days (leap year)
21. 1 week = _____ days
22. The first day of the week is _____.
23. Which is the second month of the year?
24. February has ___ days, when it is not a leap year.
25. 1 cm = _____ mm.
26. 3, 6, 9, 12, _____, _____.

J. Solve the following column wise:-

($2 \times 5 = 10$)

6. 73 kg 275 g + 11 kg 004 g
7. 70 m 38 cm – 12m 42 cm
8. 15 L 111ml + 14 L 321 ml
9. Rs 8. 65 - Rs 7. 30
10. 107 kg 213 g + 61 kg 325 g

K. Draw clocks and write for:-

($2 \times 3 = 6$)

6. Half past 5

7. Quarter past 11

8. 3 o' clock

L. Answer the following questions:-

(2×6=12)

1. Ram bought a teddy of Rs 30 and a pencils box of Rs 25. How much did he pay?
2. Sangeeta has Rs 50. She purchased one eraser of Rs 3. How much money she will get back?
3. Avni had 28 cookies. She gave 7 cookies to each of her friends. How many friends got the cookies?
4. Each bag of marbles cost Rs 2. How much 15 bags of marbles cost?
5. Write the month's name that have 30 days.
6. Fill in the blanks: a) $\underline{\hspace{1cm}} \div 44 = 0$, b) $32 \div \underline{\hspace{1cm}} = 1$

M. Divide by repeated subtraction:

(2×2=4)

1. $20 \div 4$
2. $18 \div 3$

N. Divide using multiplication tables:

(2×2=4)

1. $7 \times 3 = 21$
2. $9 \times 4 = 36$

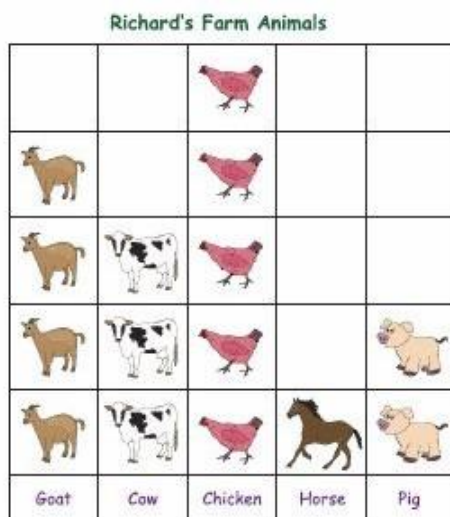
O. Complete the pattern:

(2×2=4)

1. 98, 96, 94, $\underline{\hspace{1cm}}$, $\underline{\hspace{1cm}}$, $\underline{\hspace{1cm}}$, $\underline{\hspace{1cm}}$.
2. 5, 10, 15, $\underline{\hspace{1cm}}$, $\underline{\hspace{1cm}}$, $\underline{\hspace{1cm}}$, $\underline{\hspace{1cm}}$.

F. Richard, a farmer, owns some farms animals. Picture graph shows the number of animals he has in his farm. Use the picture graph to answer the questions.

(1×5=5)



5. Which animal is fewest?
6. How many goats are there?
7. Are there more chickens or cows?
8. Which animals counts to 2?
9. How many animals are there in the farm?

1) Fill in the blanks:-**(10x1)=10**

- J) By the heating of sun the water on the water body turned into _____.
- K) The water cycle is a _____ process occurring all the time..
- L) _____ Is the closest star to our Earth.
- M) A shadow is formed on the _____ site of the source of light.
- N) Hawa Mahal of Rajasthan is made of _____.
- O) The hardest mineral is _____.
- P) Silk is a _____ fiber.
- Q) _____ Water kills the germs present in it.
- R) We should never burn leaves and _____.
- S) When the layers of _____ cover the sky the day became dull.

2) Give one example of each:-**(5x1)=5**

5. Natural Source of light-
6. Hard Rock-
7. Human made fibre-
8. Soft Mineral-
9. Gemstone-

3) Write the odd word with reason:-**(5x2)=10**

- a) Coal, Chalk, Marble, Talc.
- b) Ice, Water, Rock, Steam.
- c) Sun, Torch, Bulb, Tubelight.
- d) Silk, Plastic, Wool, Cotton.
- e) Rainy, Snowy, Thermometer, Cloudy.

4) Write the statement true or false:-**(5x1)=5**

- a) The water cycle occurs once in a month-
- b) Wind can be gentle, strong and very strong-
- c) Raincoats are made by cotton-
- d) Graphite is the softest mineral-
- e) The water we get from rain is called ground water-

5) Answer the following:-**(10x2)=20**

11. What happens when clouds become packed with water droplets?
12. When is a shadow formed?
13. What are minerals? Give one example?
14. How glass is made?
15. Which is the main source of water on Earth?
16. Which is heavier, an empty or deflated balloon or a balloon filled with air?
17. Write one use of graphite?
18. From where we can get wool and cotton?
19. When the shadow is the shortest? and why?
20. Write two way how we can make air clean?

6) Match the following:-

(1x5)=5

- a) In the morning
- b) White Marble
- c) Thermometer
- d) Bucket
- e) Sweater

- (i) Made by wool
- (ii) A Device to measure temperature.
- (iii) Made by plastic.
- (iv) long shadow
- (v) Taj Mahal

7) Draw a labelled picture of Water Cycle.

(1x5)=5

ANNUAL EXAMINATION, 2023-24

SUBJECT: GK

FM - 60

A. Fill in the blanks:-

(20×1)=20

1. A famous animation movie is _____.
2. The machine shows is cartoon, news, flims is _____.
3. _____ is called the 'Master Organ' of our body.
4. The heavenly body which has a long shining tail is _____.
5. Sprinting is an _____.
6. Our national game is _____.
7. Jasprit Bumrah is a _____.
8. We should say _____ when we want something from others.
9. _____ is the largest Internal organ in the body.
10. The 20 feet long food processor is called _____.
11. _____ is the natural satellite of Earth.
12. _____ is called the 'Master Blaster' in the cricket world.
13. A ball name is _____ (Fencing/ Rugby).
14. When you made a mistake you should say _____.
15. When you help a needy person, then you feel _____.
16. Complete the word: P _____ R _____ T.
17. _____ Controls all the functions of our body.
18. When you share your things with your friends, then you feel _____.
19. _____ is the first man to step on the Moon.
20. Fill with preposition: The Sun is _____ (Below/Above) the mountain.

B. Look at the picture and write what is it:-

(8×2)=16



1.



2.



3.



4.



5.



6.



7.



8.

C. Answer the following questions:-

(10×2)=20

1. What is Mansion?
2. Write two prevention we can take for covid?
3. What is a Dockyard?
4. What is the largest sense organ in our body?
5. How digital camera helps us?
6. Write two polite behavior we should follow.
7. What are satellites?
8. What is the function of kidney?
9. Write one situation in which we feel good and one in which we feel bad.
10. In which place we can find houseboats?

D. Understand and put the correct sign:-

(4×1)=4

- | | |
|---|--|
| 10. $10 \text{ } \underline{\hspace{1cm}} \text{ } 5 = 15.$ | 2. $8 \text{ } \underline{\hspace{1cm}} \text{ } 8 = 0$ |
| 3. $2 \text{ } \underline{\hspace{1cm}} \text{ } 5 = 10.$ | 4. $30 \text{ } \underline{\hspace{1cm}} \text{ } 6 = 5$ |

ANNUAL EXAMINATION, 2023-24

SUBJECT: M.SC.

FM - 60

11. Fill in the blanks:-

(10x1)=10

21. Farmer prayed to ___ a good crop.
22. The boy had his mother and three younger ___.
23. The poor boy's mother strictly ordered him to give the bag to his ___ at his address .
24. The farmer waited ___.
25. In this yoga pose, we have to join our palms together with stand straight, it is _____ pose.
26. We should not _____ our fingers while eating food.
27. In the story 'Nobility Appreciated', the boy was very _____.
28. The rich man was a _____.
29. "If I try to fly, I will fall down"- said by _____.
30. If we want to succeed in life, then we should keep _____ in ourselves.

12. Write the statement True or False:-

(5x1)=5

31. "Hold on to my tail"- said by the big kite-
32. It is very important to have self confidence-
33. The farmer with his villagers prayed for a good crop-
34. Wasting food is a good manner-
35. The rich man did not get impressed by the poor boy-

13. Answer the following questions:-

(10x2)=20

36. What work did the farmer do patiently?
37. Write any 2 good manners which we should obey at table.
38. What is honesty?
39. What did the boy see on the roadside?
40. If you were at the farmer's place, what would you have done?
41. Why we need to place napkin on our lap while eating?
42. When we need to say 'please', and 'thank you'?
43. Why we need to keep patience?
44. What did the other villagers do?
45. Write two poses name of yoga.

D) Unscrambled word:-

(5x1)=5

- | | |
|---------------|-----------|
| 26. ATNEPIEC- | 27. RCOP- |
| 28. TEHONS- | 29. HRIC- |
| 30. VRBAE- | |

E) Make sentence:-

(5x2)=10

31. Courage-
32. Kite-
33. Truth-
34. Yoga-
35. Bag-

F) Long Questions:-

(2x5)=10

36. Write some manners which we should not maintain at table.
37. Write some value treasure that we should maintain to make us as a good human being.

ANNUAL EXAMINATION, 2023-24

SUBJECT: DRAWING

GRADE: A/B/C

Draw a 'Toffee' or a 'Boat' and colour it:-